

PAST EXAM PAPERS & MEMOS FOR ENGINEERING STUDIES N1-N6

THANK YOU FOR DOWNLOADING THE PAST EXAM PAPER, WE HOPE IT WILL BE OF HELP TO YOU. AT THE MOMENT WE **DO NOT HAVE MEMO FOR THE PAPER** BUT KEEP CHECKING OUT WEBSITE AND ONCE AVAILABLE WE WILL ADD IT FOR YOU.

ARE YOU IN NEED OF MORE PAPERS

You might be in need of **more question papers** and answers (memos) as you prepare for your final exams. We have a FULL SINGLE DOWNLOAD in pdf of papers between **2014-2019**. **ALL THE PAPERS HAVE ANSWERS (MEMOS)**. We sell these at a **very discounted price** of **R299.00** per subject. Visit our website <https://previouspapers.co.za/shop/> to purchase a full download. Once you purchase, you get instant download and access. The online payment is also safe and we use [payfast](#) as it is used by all the banks in South Africa.

PRICE OF THE PAPERS AT A BIG DISCOUNT

Previous papers are very important in ensuring you pass your final exams. The **actual value** of the papers access is way more than **R1 000** but we are making you access these for a small fee of **R299.00**. The small fee helps to maintain the website.

BONUS PAPERS

We are also **adding bonus papers for free** which are papers between 2008-2011. These papers are very valuable as examiners usually repeat questions from old papers time and again. You get access to bonus papers after purchasing your paper.

MORE FREE PAPERS

[Click here](#) to access more **FREE PAPERS**.



**higher education
& training**

Department:
Higher Education and Training
REPUBLIC OF SOUTH AFRICA

NATIONAL CERTIFICATE

PLATERS' THEORY N2

(11022182)

**9 April 2020 (X-paper)
09:00–12:00**

Drawing instruments and nonprogrammable calculators may be used.

This question paper consists of 6 pages.


219Q1A2009

DEPARTMENT OF HIGHER EDUCATION AND TRAINING
REPUBLIC OF SOUTH AFRICA
NATIONAL CERTIFICATE
PLATERS' THEORY N2
TIME: 3 HOURS
MARKS: 100

INSTRUCTIONS AND INFORMATION

1. Answer all the questions.
 2. Read all the questions carefully.
 3. Number the answers according to the numbering system used in this question paper.
 4. Use only a black or a blue pen.
 5. Write neatly and legibly.
-


QUESTION 1: MACHINES

- 1.1 Briefly describe the working principle of a guillotine. (4)
- 1.2 Briefly describe the use of a box and pan folding machine.  (4)
- 1.3 State TWO safety precautions to be observed when working with a pedestal grinding machine. (2)
- [10]**

QUESTION 2: ROLLING AND BENDING

- 2.1 The diameter of a 45 × 45 × 4 mm external angle-iron ring, measured across the heel of the angle iron, is 0,8 m.

Calculate the length of the angle iron required to form the ring using the formula below:

$$L = [D + T + (T \div 3)] \pi$$



Where : L = Length of the angle iron
 T = Thickness of the angle iron
 D = Heel diameter of ring

(5)

- 2.2 Briefly describe how pyramid rolls bend a plate. Do not use a drawing in your explanation.

(5)

[10]**QUESTION 3: JOINING OF STEEL PROFILES**

- 3.1 State FOUR advantages of using a well-designed assembly jig. (4)
- 3.2 Name THREE requirements with which a well-designed welding jig should comply.  (3)
- 3.3 Make a neat, freehand drawing to show a method to join an angle iron to an H-profile. (3)
- [10]**

QUESTION 4: GENERAL PIPEWORK

4.1 FIGURE 1 shows the outside view of a centre finder.

Name the parts indicated in FIGURE 1 by writing only the answer next to the letter (A–D) in the ANSWER BOOK.

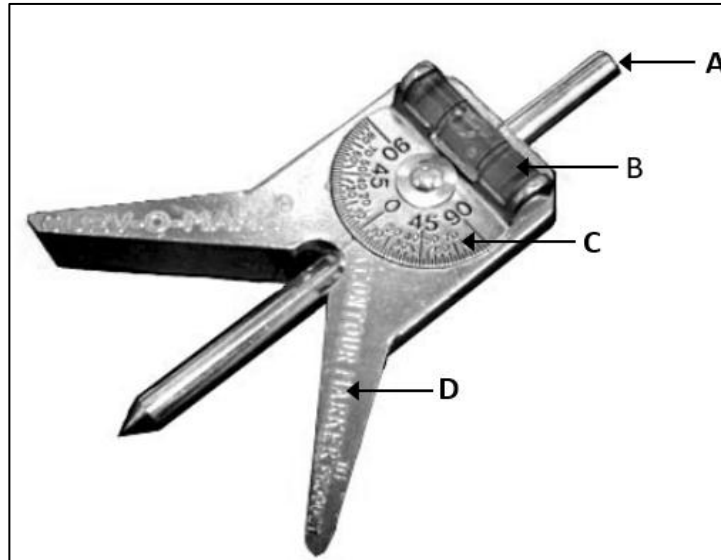


FIGURE 1

(4)

4.2 FIGURE 2 shows a pipe reducer.



Briefly describe how to go about marking off a pipe for cutting when making a pipe reducer.

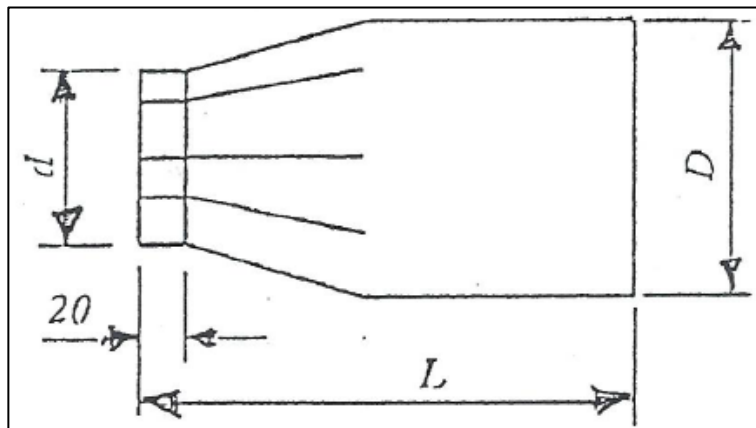


FIGURE 2

(6)
[10]

QUESTION 5: STEEL STRUCTURE

The span of a simple roof truss is 8 m and the length of the rafter is 4,472 m.

Calculate the following:

5.1 Rise



5.2 Pitch

(2 × 3)

[6]

QUESTION 6: TEMPLATES

6.1 Briefly discuss the use of templates made from the following materials:

6.1.1 Template paper

6.1.2 Timber



(2 × 2)

(4)

6.2 Give TWO reasons for the use of a template.

(2)

[6]

QUESTION 7: METALS

7.1 Briefly explain the function of annealing as applied to a heat-treatment process.

(2)

7.2 Explain FOUR positive effects the following elements have on the change of properties of steel when they are alloyed:



7.2.1 Nickel


7.2.2 Chrome

(2 × 4)


(8)

[10]

QUESTION 8: GAS WELDING AND CUTTING

- 8.1 Briefly state the adverse effects of the following when doing gas cutting or welding:
- 8.1.1 Laminated plates
 - 8.1.2 Scales
 - 8.1.3 Paint 
 - 8.1.4 Oxide on the surface
- (4 × 2) (8)
- 8.2 Briefly explain the working principle of the straight line gas cutting machine. (2)
[10]

QUESTION 9: ARC WELDING

- 9.1 Briefly explain the following welding terms:
- 9.1.1 Bevel angle
 - 9.1.2 Groove angle
 - 9.1.3 Deposited metal
 - 9.1.4 Electrode 
- (4 × 2) (8)
- 9.2 State FOUR causes of poor penetration when welding. (4)
[12]

QUESTION 10: CALCULATION AND PLANNING

Calculate the mass of a 6 mm thick metal plate required to make up 30 trays of 400 mm length, 200 mm width and 60 mm depth.

The mass of 1 mm thick plate = 7,85 kg/m²



[16]

TOTAL: 100